

Centre Number						Candidate Number				
Surname										
Other Names										
Candidate Signature										



General Certificate of Secondary Education
Higher Tier
January 2013

Mathematics (Linear)

43652H

Paper 2

Tuesday 15 January 2013 1.30 pm to 3.30 pm

H

<p>For this paper you must have:</p> <ul style="list-style-type: none"> • a calculator • mathematical instruments. 	
---	--

Time allowed

- 2 hours

Instructions

- Use black ink or black ball-point pen. Draw diagrams in pencil.
- Fill in the boxes at the top of this page.
- Answer **all** questions.
- You must answer the questions in the spaces provided. Do not write outside the box around each page or on blank pages.
- Do all rough work in this book.

Information

- The marks for questions are shown in brackets.
- The maximum mark for this paper is 105.
- The quality of your written communication is specifically assessed in Questions 2, 12 and 23. These questions are indicated with an asterisk (*).
- You may ask for more answer paper, tracing paper and graph paper. These must be tagged securely to this answer book.

Advice

- In all calculations, show clearly how you work out your answer.

For Examiner's Use	
Examiner's Initials	
Pages	Mark
3	
4 – 5	
6 – 7	
8 – 9	
10 – 11	
12 – 13	
14 – 15	
16 – 17	
18 – 19	
20 – 21	
22 – 23	
TOTAL	



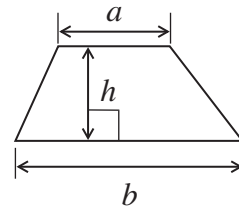
J A N 1 3 4 3 6 5 2 H 0 1

WMP/Jan13/43652H

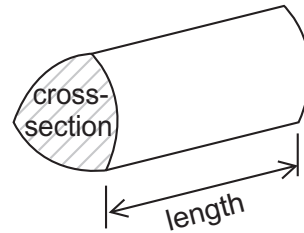
43652H

Formulae Sheet: Higher Tier

Area of trapezium = $\frac{1}{2}(a+b)h$

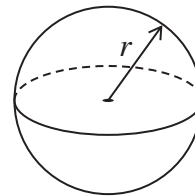


Volume of prism = area of cross-section \times length



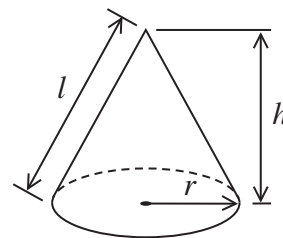
Volume of sphere = $\frac{4}{3}\pi r^3$

Surface area of sphere = $4\pi r^2$



Volume of cone = $\frac{1}{3}\pi r^2 h$

Curved surface area of cone = $\pi r l$

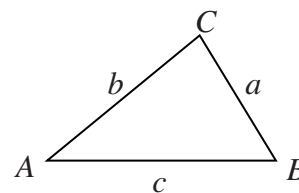


In any triangle ABC

Area of triangle = $\frac{1}{2}ab \sin C$

Sine rule $\frac{a}{\sin A} = \frac{b}{\sin B} = \frac{c}{\sin C}$

Cosine rule $a^2 = b^2 + c^2 - 2bc \cos A$



The Quadratic Equation

The solutions of $ax^2 + bx + c = 0$, where $a \neq 0$, are given by

$$x = \frac{-b \pm \sqrt{b^2 - 4ac}}{2a}$$



Answer **all** questions in the spaces provided.

1 Pens cost 15 pence each.
Rulers cost 20 pence each.

1 (a) Write down an expression for the cost of x pens and y rulers.

.....

Answer (2 marks)

1 (b) A school buys 150 pens and 90 rulers.

The total cost is reduced by $\frac{1}{5}$

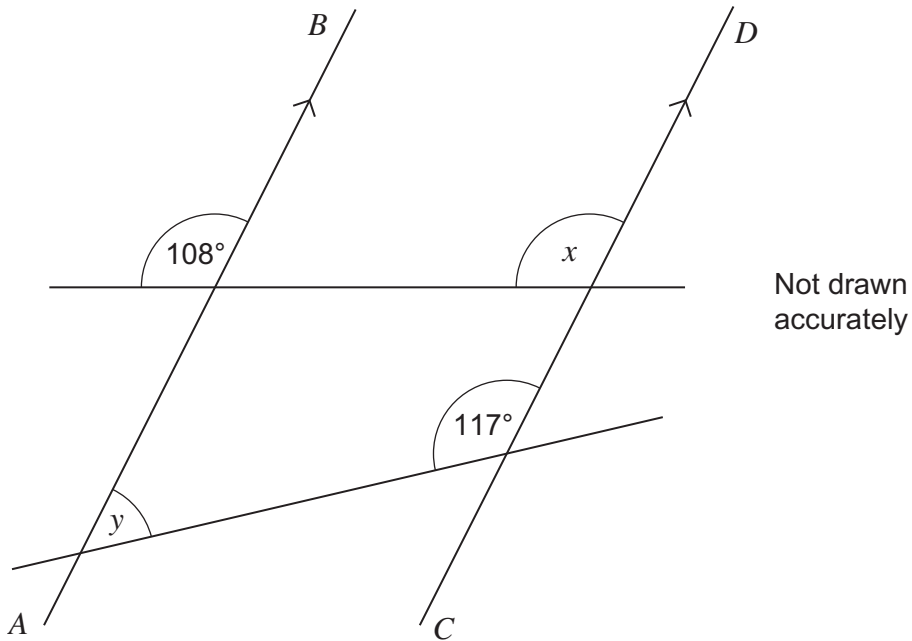
How much does the school pay?

.....
.....
.....
.....
.....

Answer £ (5 marks)



2 *AB* is parallel to *CD*.



*2 (a) Write down the size of angle *x*.
Give a reason for your answer.

Answer degrees

Reason
(2 marks)

2 (b) Work out the size of angle *y*.

Answer degrees (2 marks)



3 Jan wants to carpet her room.
 The room is a rectangle, length 5 m and width 3.6 m.
 She uses this formula to work out the cost of the carpet.

$$C = \frac{50A}{3} + 45$$

C is the cost in pounds and A is the area of the room in m^2 .

How much should the carpet cost?

.....

Answer £ (4 marks)

4 Jack works eight hours each day.
 He is paid £6.50 per hour.
 He shares his wages with Kim in the ratio

$$\text{Jack} : \text{Kim} = 4 : 1$$

Jack saves his share.

How many working days will it take Jack to save £1040?

.....

Answer (5 marks)



5 Put the numbers 1, 2 or 3 on each card so that when a card is picked at random

- the probability of picking a 2 is greater than $\frac{1}{2}$
- the probability of picking a 1 is twice the probability of picking a 3.

(2 marks)

6 (a) Work out the value of 7^3

.....

Answer (1 mark)

6 (b) The sum of two consecutive cube numbers is 341.

Work out the two numbers.

.....

.....

.....

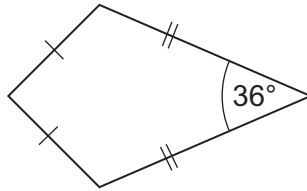
.....

Answer and (2 marks)



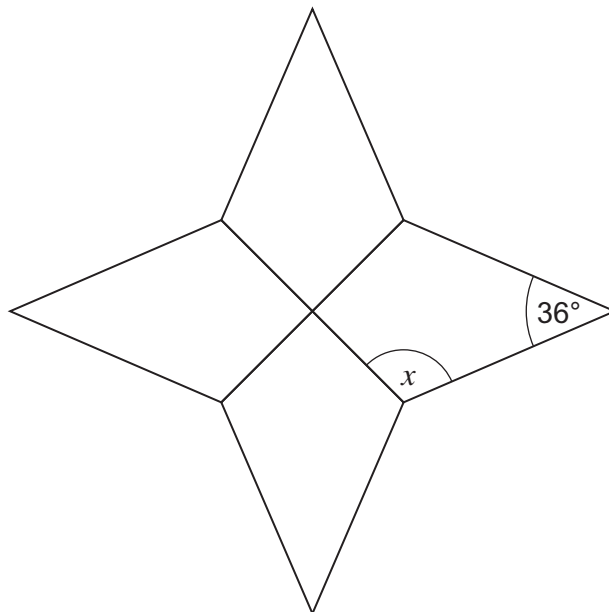
7 The diagram shows a kite.

Not drawn accurately



Four identical kites are joined to make this shape.

Not drawn accurately



Work out the size of angle x .

.....

.....

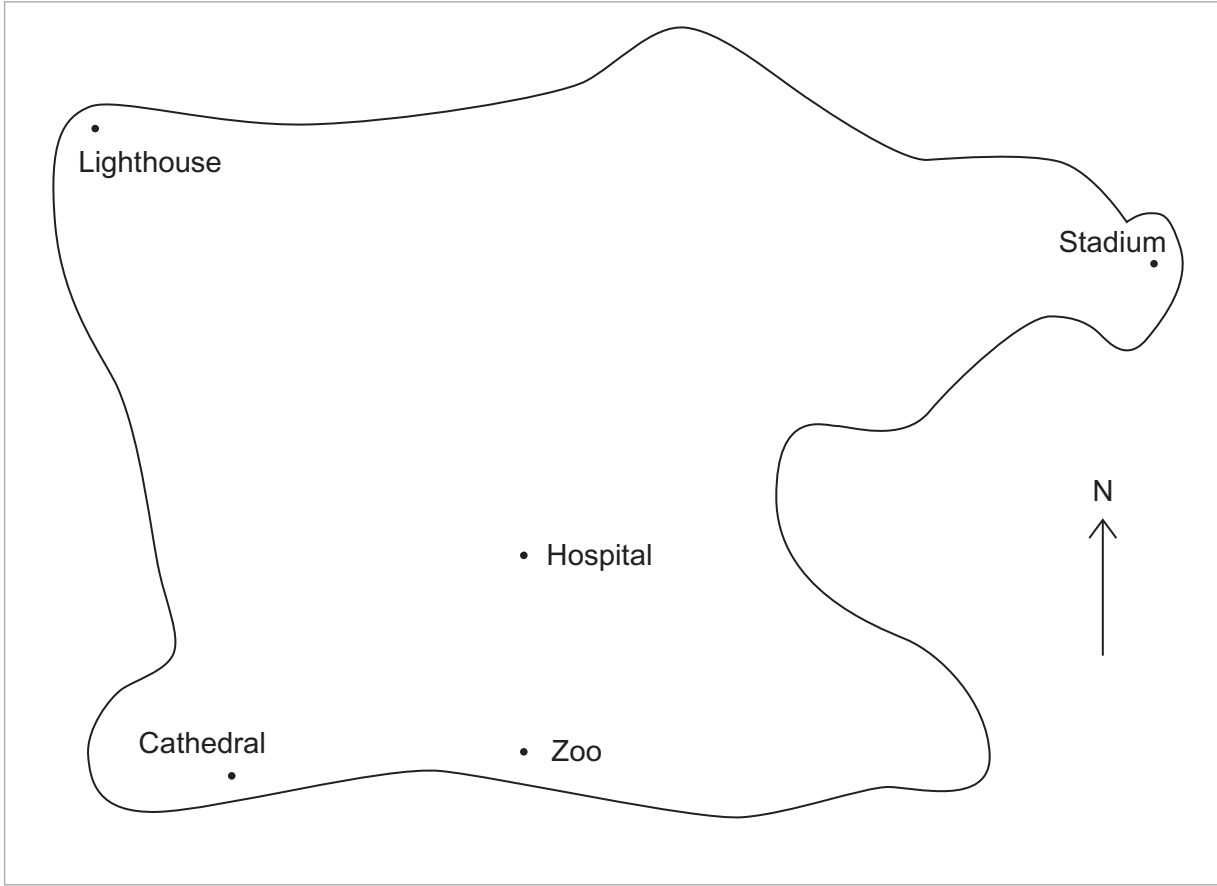
.....

.....

Answer degrees (4 marks)



8



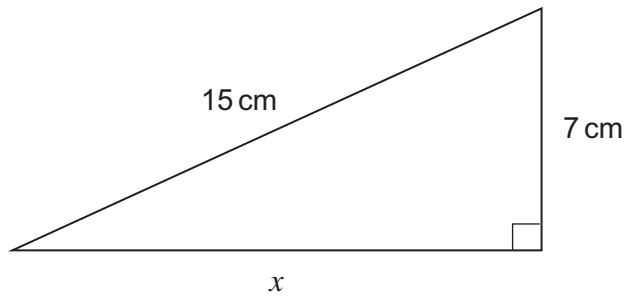
The airport is on a bearing of 040° from the Hospital and 270° from the Stadium.

Mark the position of the Airport on the map.

(3 marks)



9 Work out length x .



Not drawn accurately

.....

.....

.....

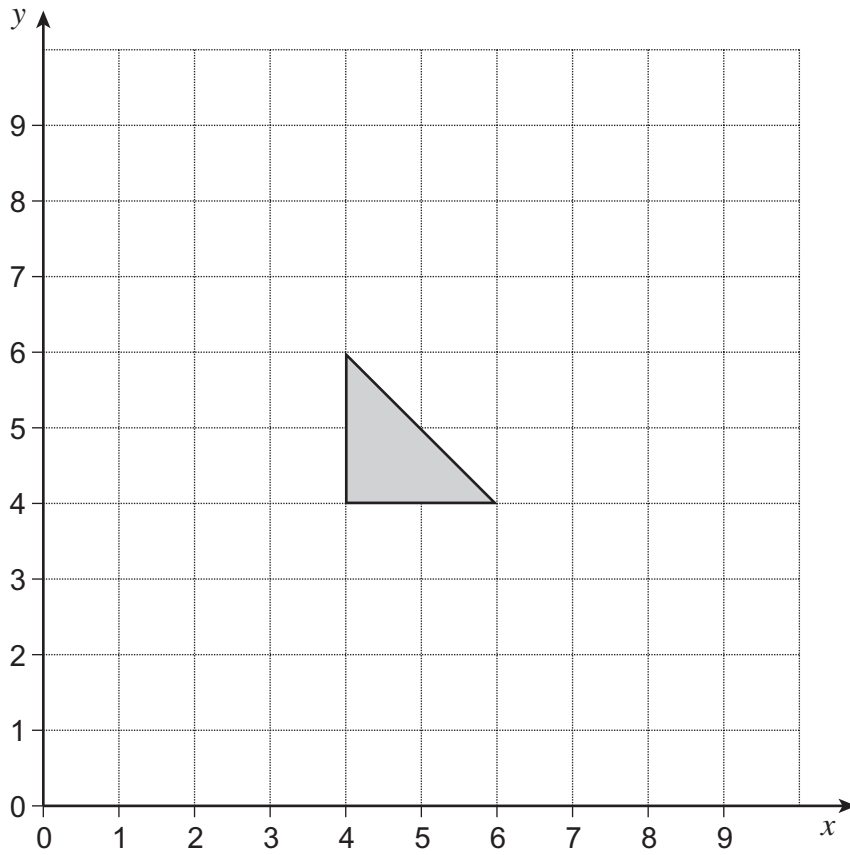
.....

Answer cm (3 marks)

Turn over for the next question



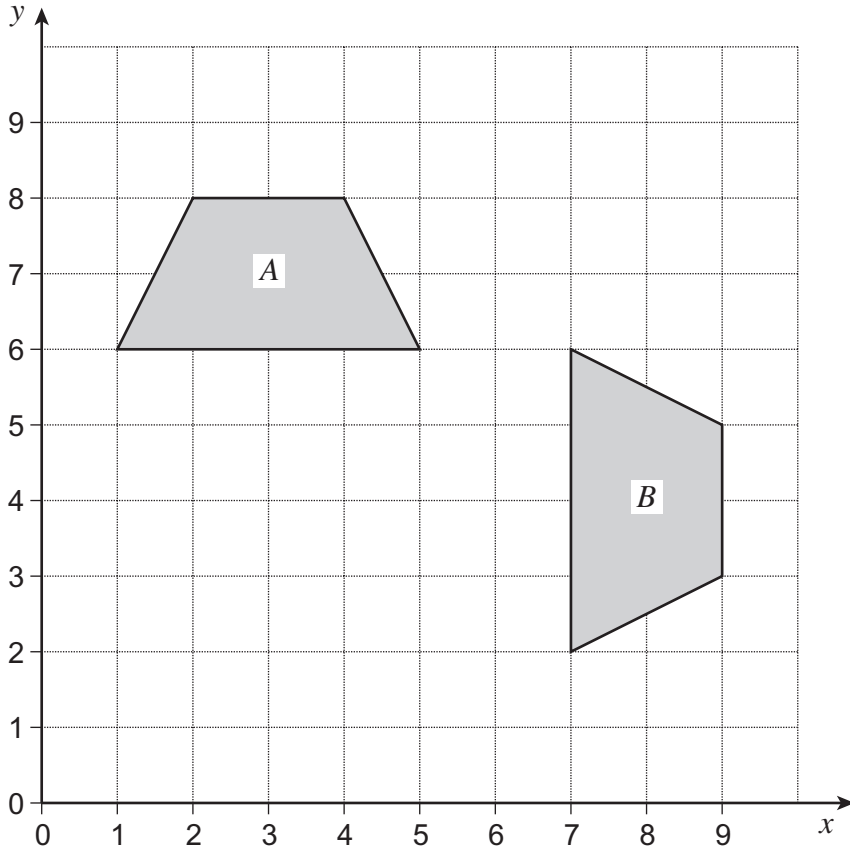
10 (a) Translate the shape by the vector $\begin{pmatrix} 2 \\ 3 \end{pmatrix}$



(2 marks)



10 (b)



Describe fully the **single** transformation that takes shape *A* to shape *B*.

.....

.....

.....

(3 marks)

Turn over for the next question



11 An ordinary fair dice is rolled 120 times.
How many times would you expect to roll a 6?

.....
.....

Answer (2 marks)

***12** Samples are taken from a production line.
The number of faulty items is shown.

	Sample A	Sample B	Sample C
Sample size	300	250	400
Number of faulty items	42	33	48

Which sample has the biggest **proportion** of faulty items?

You **must** show your working.

.....
.....
.....
.....
.....
.....
.....

Answer (3 marks)



13 (a) Expand and simplify $2(a + 3) + 5(a - 1)$

.....
.....

Answer (2 marks)

13 (b) Simplify $5c^4d^2 \times c^2d^3$

.....
.....

Answer (2 marks)

13 (c) Simplify fully $\frac{8(x - 3)^2}{4(x - 3)(x + 3)}$

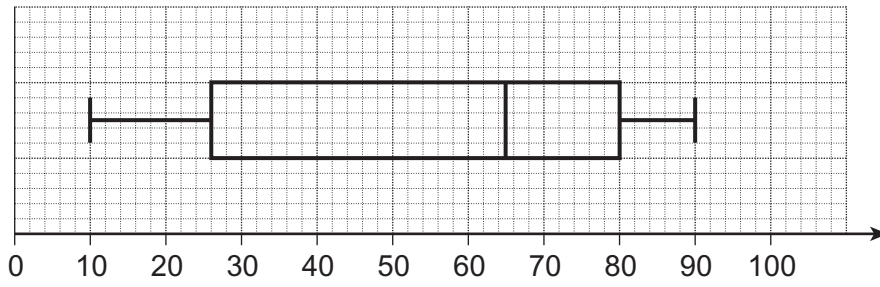
.....
.....
.....

Answer (2 marks)

Turn over for the next question



14 The diagram shows a box plot.



14 (a) Write down the median.

Answer (1 mark)

14 (b) Work out the interquartile range.

.....
.....

Answer (1 mark)



15 (a) Factorise fully $4x^2 - 6xy$

.....
.....

Answer (2 marks)

15 (b) Solve $\frac{2w - 1}{4} = 2 - w$

.....
.....
.....

$w =$ (3 marks)

Turn over for the next question

7

Turn over ►



16 80 patients gave information about how long they waited to see the doctor.

Time, T , (minutes)	Frequency		
$0 \leq T < 10$	5		
$10 \leq T < 20$	22		
$20 \leq T < 30$	28		
$30 \leq T < 40$	21		
$40 \leq T < 50$	4		

16 (a) Work out an estimate of the mean time that the patients waited.

.....

.....

.....

.....

.....

Answer minutes (4 marks)

16 (b) The doctor says, "70% of our patients wait less than 30 minutes to be seen."

Is she correct?
You **must** show your working.

.....

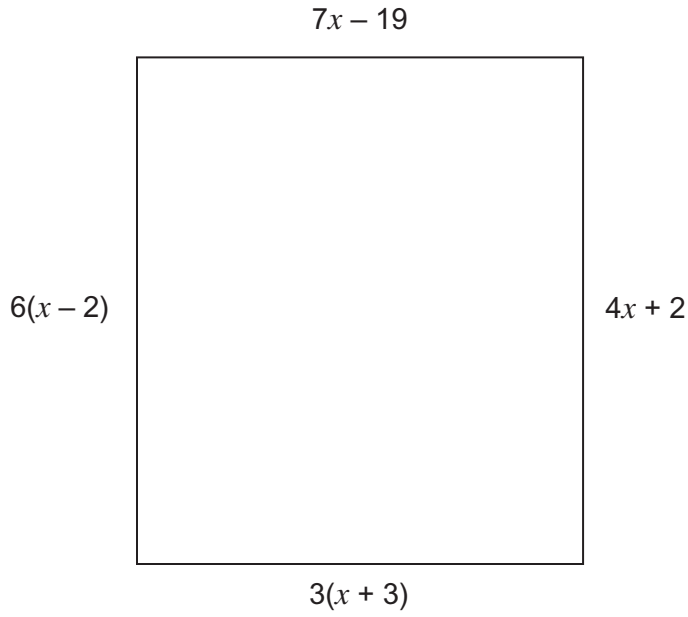
.....

.....

Answer (3 marks)



17 Show that **all** sides of this quadrilateral could be equal.



Not drawn
accurately

.....

.....

.....

.....

.....

.....

.....

.....

.....

.....

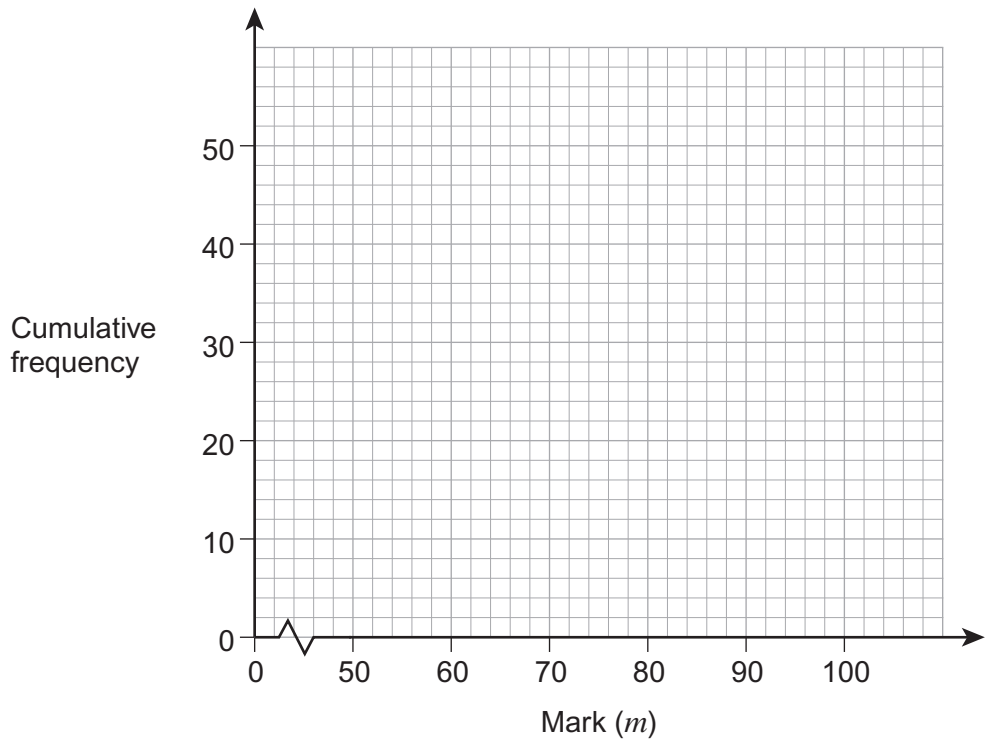
(5 marks)



18 The table shows the marks of 50 students in a test.

Mark (m)	Number of students	
$50 < m \leq 60$	2	
$60 < m \leq 70$	3	
$70 < m \leq 80$	20	
$80 < m \leq 90$	16	
$90 < m \leq 100$	9	

18 (a) Draw a cumulative frequency diagram for the data.



(3 marks)

18 (b) Students who scored between 72 and 85 marks are chosen for extra lessons.

Estimate the number of students chosen.

.....

.....

.....

Answer (3 marks)



19 These are the times for 200 people to get to work.

Time, t , (minutes)	Number of people
$0 < t \leq 10$	7
$10 < t \leq 30$	21
$30 < t \leq 40$	78
$40 < t \leq 50$	64
$50 < t \leq 100$	30

A 10% sample, stratified by time, is taken.

Complete the table.

.....

.....

.....

Time, t , (minutes)	Number of people in the sample
$0 < t \leq 10$	
$10 < t \leq 30$	
$30 < t \leq 40$	
$40 < t \leq 50$	
$50 < t \leq 100$	

(3 marks)



20 R is inversely proportional to A .

$$R = 12.1 \text{ when } A = 1.5$$

20 (a) Work out a formula connecting R and A .

.....

.....

.....

.....

Answer (3 marks)

20 (b) Work out the value of R when $A = 4$

.....

.....

Answer (2 marks)

21 £1800 is invested at 4% compound interest per year.

How many years will it take for the investment to be worth £2000?

.....

.....

.....

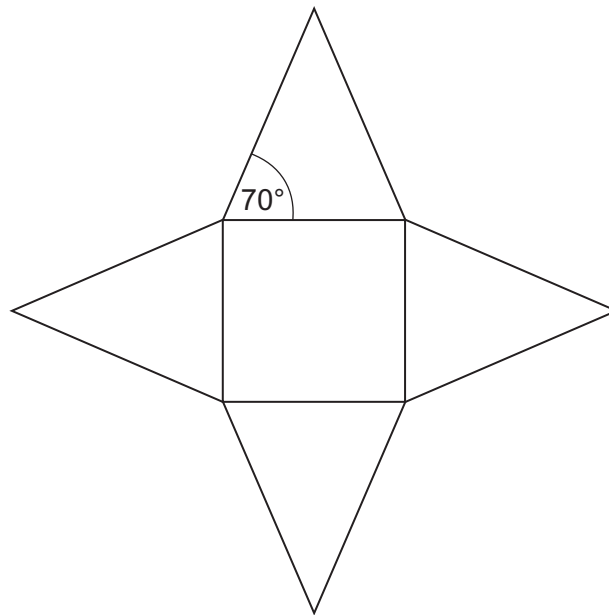
.....

Answer years (4 marks)



22

The diagram shows the net of a square-based pyramid.



Not drawn
accurately

The area of the square base is 36 cm^2 .

Work out the area of one triangular face.

.....

.....

.....

.....

.....

.....

.....

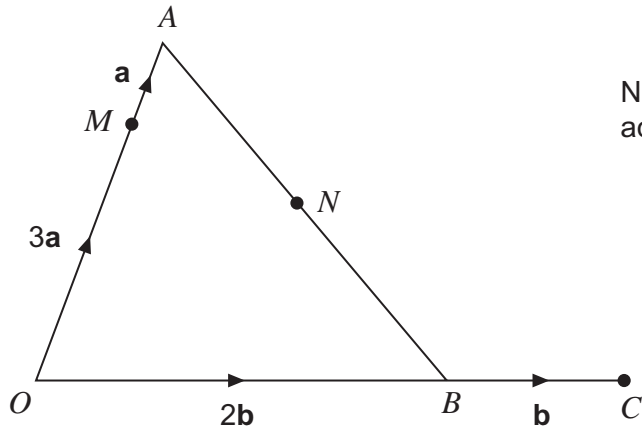
.....

Answer cm^2 (5 marks)



23

OAB is a triangle.
 OBC is a straight line.



Not drawn
accurately

$$\vec{OA} = 4\mathbf{a}$$

$$\vec{OB} = 2\mathbf{b}$$

$$\vec{BC} = \mathbf{b}$$

$$\vec{OM} = 3\mathbf{a}$$

N is the midpoint of AB .

23 (a) Work out \vec{MN} in terms of \mathbf{a} and \mathbf{b} .
Simplify your answer.

.....

.....

.....

.....

.....

.....

.....

.....

Answer (3 marks)



* 23 (b) Show that M, N and C lie on a straight line.

.....

.....

.....

.....

.....

.....

.....

(3 marks)

24 Solve the simultaneous equations.

$$y = x + 4$$

$$y = 2x^2 + 3x - 1$$

Give your answers to 2 decimal places.

.....

.....

.....

.....

.....

.....

.....

.....

.....

Answer (6 marks)

END OF QUESTIONS



There are no questions printed on this page

**DO NOT WRITE ON THIS PAGE
ANSWER IN THE SPACES PROVIDED**

Copyright © 2013 AQA and its licensors. All rights reserved.

Images © Thinkstock.

