

Please write clearly in block capitals.

Centre number

--	--	--	--	--

Candidate number

--	--	--	--

Surname

Forename(s)

Candidate signature

GCSE MATHEMATICS (LINEAR)

F

Foundation Tier Paper 1

Wednesday 4 November 2015 Morning Time allowed: 1 hour 15 minutes

Materials

For this paper you must have:

- mathematical instruments.

You must **not** use a calculator.



Instructions

- Use black ink or black ball-point pen. Draw diagrams in pencil.
- Answer **all** questions.
- You must answer the questions in the spaces provided. Do not write outside the box around each page or on blank pages.
- Do all rough work in this book.

Information

- The marks for questions are shown in brackets.
- The maximum mark for this paper is 70.
- The quality of your written communication is specifically assessed in Questions 14 and 20. These questions are indicated with an asterisk (*).
- You may ask for more answer paper, tracing paper and graph paper. These must be tagged securely to this answer book.

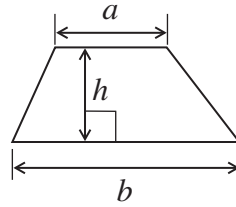
Advice

- In all calculations, show clearly how you work out your answer.

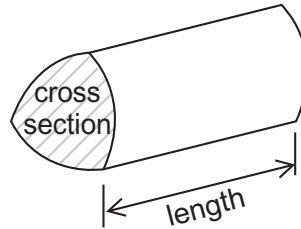


Formulae Sheet: Foundation Tier

Area of trapezium = $\frac{1}{2}(a+b)h$

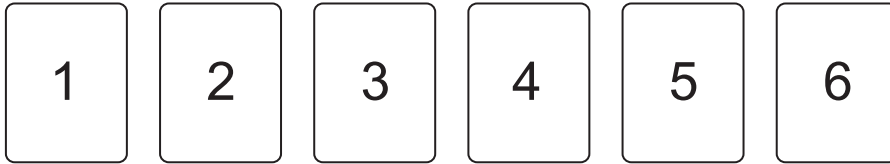


Volume of prism = area of cross section \times length



Answer **all** questions in the spaces provided.

1 Here are some cards.



A card is chosen at random.

Circle the probability word that describes these events.

1 (a) The card shows an odd number.

[1 mark]

Impossible Unlikely Evens Likely Certain

1 (b) The card shows a negative number.

[1 mark]

Impossible Unlikely Evens Likely Certain

1 (c) The card shows a 6

[1 mark]

Impossible Unlikely Evens Likely Certain



2 Work out $12 \div 1\frac{1}{2}$

[2 marks]

.....
.....

Answer

3 John buys a magazine for £1.49 and a newspaper for 55p
He pays with a £5 note.

How much change does he get?

[2 marks]

.....
.....
.....

Answer £

4 Put these numbers in order.
Start with the smallest.

[1 mark]

1.04 1.43 1.4 1.34

Answer , , ,



5 (a) Solve $\frac{w}{2} = 14$

[1 mark]

$w =$

5 (b) Simplify fully $3x + 4 - 5x - 7$

[2 marks]

.....

Answer

5 (c) Work out the value of $4a + 5b$ when $a = 4$ and $b = 1$

[2 marks]

.....

.....

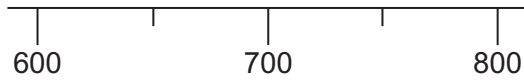
Answer

Turn over for the next question



6 (a) Draw an arrow to show 640 on the scale.

[1 mark]



Here is a table of postage costs.

Mass	Cost of posting
0 – 100 grams	£0.93
101 – 250 grams	£1.24
251 – 500 grams	£1.65
501 – 750 grams	£2.38

6 (b) How much **more** does it cost to post a 640 gram letter than a 64 gram letter?

[2 marks]

.....

.....

Answer £

6 (c) How many 150 gram letters can be posted for £10 ?

[2 marks]

.....

.....

.....

Answer



7 Match the name of each shape to a correct property. One has been done for you.

[2 marks]

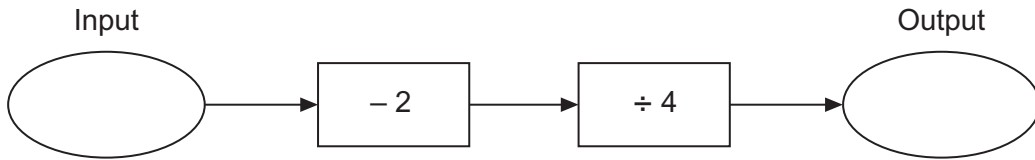
Kite ● ● All sides equal

Parallelogram ● ● One line of symmetry

Rectangle ● ● All angles equal

Rhombus ● ● No lines of symmetry

8 Here is a number machine.



8 (a) Work out the **output** when the input is 12

[1 mark]

.....

.....

Answer

8 (b) Work out the **input** when the output is -3

[2 marks]

.....

.....

.....

Answer



9 Here are five numbers.

7 11 8 12 7

9 (a) Write down the mode.

[1 mark]

Answer

9 (b) Work out the mean.

[2 marks]

.....
.....

Answer

10 (a) Circle the **two** values that are less than a half.

[1 mark]

$\frac{1}{2}$ 55% 0.45 $\frac{4}{7}$ 30%

10 (b) Circle the **two** values that are equal.

[1 mark]

$\frac{1}{3}$ 20% 0.15 $\frac{1}{5}$ 30%

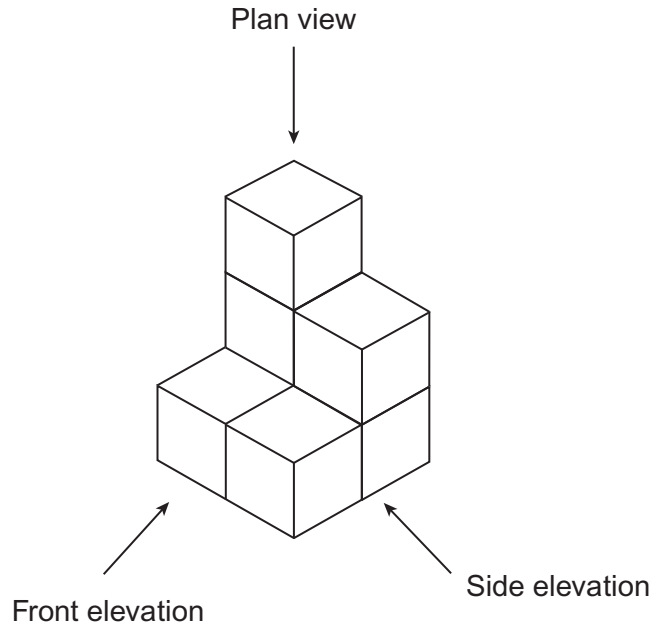
10 (c) Circle the fraction that is recurring when written as a decimal.

[1 mark]

$\frac{1}{2}$ $\frac{1}{3}$ $\frac{3}{4}$ $\frac{3}{2}$



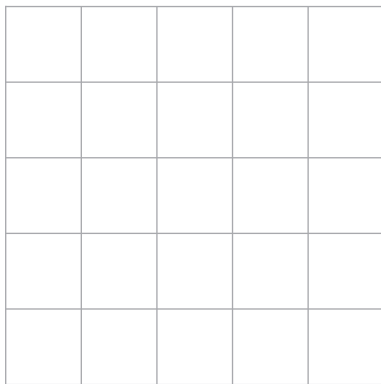
11 Some cubes of side 1 cm are put together to build this solid shape.



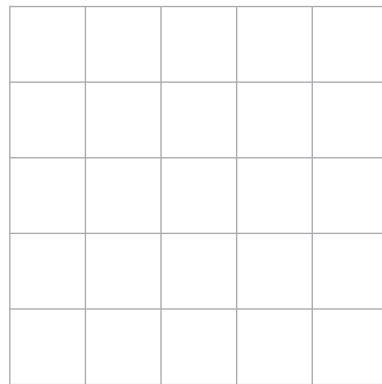
On the grids draw the plan view, side elevation and front elevation.

[3 marks]

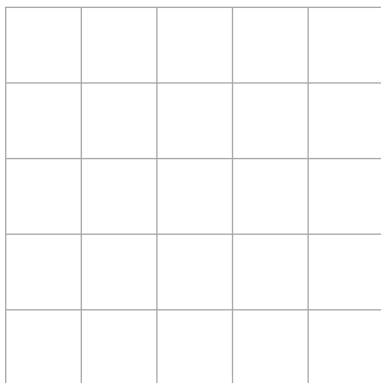
Plan view



Side elevation



Front elevation



12 (a) Circle the **two** prime numbers.

[2 marks]

11

21

23

39

45

12 (b) Write down any **two** prime numbers that add up to a cube number.

[2 marks]

.....

.....

.....

.....

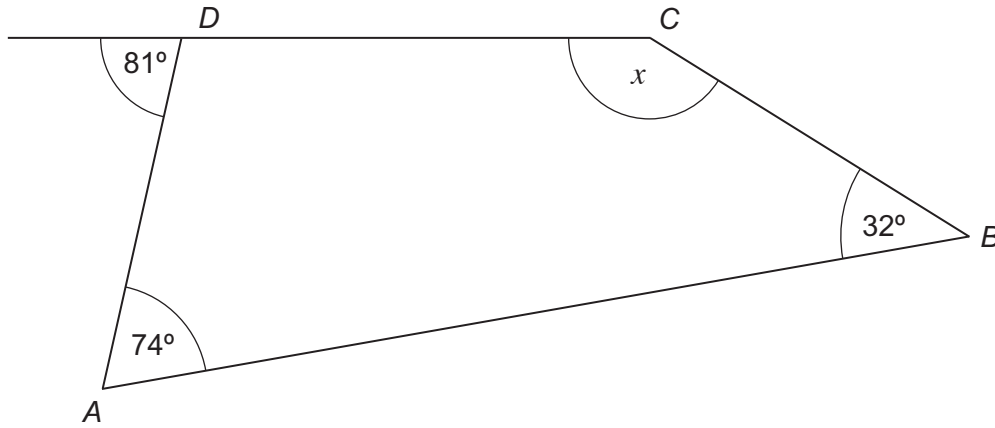
Answer and



13 *ABCD* is a quadrilateral.
The side *CD* is extended.

Work out the size of angle *x*.

[3 marks]



Not drawn
accurately

.....

.....

.....

.....

.....

.....

Answer degrees

Turn over for the next question



***14** Three shops sell the same washing machine.

Shop A



£150 deposit
plus
£60 a month for 6 months

Shop B



Usual price £600
20% off

Shop C



Usual price £720
 $\frac{1}{4}$ off

In which shop is the washing machine cheapest?
You **must** show your working.


[5 marks]

.....
.....
.....
.....
.....
.....
.....
.....
.....
.....
.....
.....
.....

Answer



15 A shape is made from a rectangle R and a square S.



Not drawn
accurately

The shape has a perimeter of 44 cm
The area of the square is 36 cm²

Work out the area of the shape.

[4 marks]

.....

.....

.....

.....

.....

.....

.....

.....

.....

.....

Answer cm²

Turn over for the next question



16 (a) Work out $\frac{3}{4} - \frac{1}{3}$

[2 marks]

.....
.....

Answer

16 (b) Work out $\frac{1}{3} \times \frac{5}{6} \times \frac{9}{10}$

Give your answer in its simplest form.

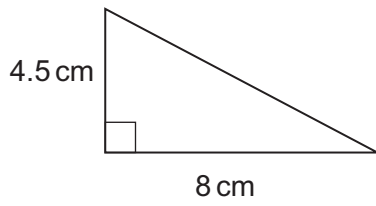
[3 marks]

.....
.....
.....
.....

Answer



17 Here is a right-angled triangle.



Not drawn accurately

17 (a) Show that the area of this triangle is 18 cm^2

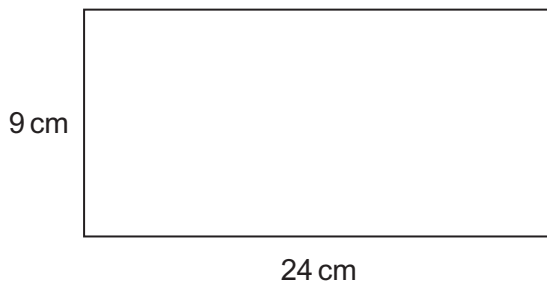
[1 mark]

.....

.....

.....

17 (b) Here is a rectangle.



Not drawn accurately

How many of the right-angled triangles from part (a), will fit in the rectangle?

[3 marks]

.....

.....

.....

.....

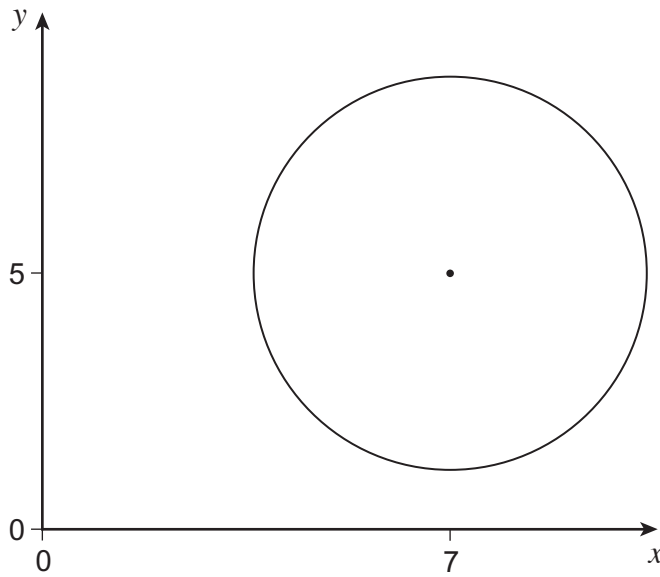
Answer

9

Turn over ►



18 A circle radius 3 units, centre (7, 5) is shown.



Not drawn
accurately

Work out the coordinates of **any** point that lies on the circumference of the circle.
You **must** show your working, which may be on the diagram.

[2 marks]

Answer (..... ,)

19 Divide 270 in the ratio 3 : 2 : 1

[3 marks]

.....

.....

.....

Answer : :



20 Fay is testing an ordinary six-sided dice to see if it is biased.
She throws the dice 120 times.

20 (a) Work out the number of times the dice is expected to land on 1

[1 mark]

.....
.....

Answer

*20(b) Here are the actual results.

Number on dice	1	2	3	4	5	6	Total
Frequency	5	19	17	20	21	38	120

Is the dice biased?
Tick a box.

Yes No Cannot tell

Give a reason for your answer.

[2 marks]

.....
.....
.....



21 These expressions represent four numbers.

$$2x + 2$$

$$3x - 1$$

$$4x - 6$$

$$5x + 2$$

The sum of the first two expressions is 36

Work out the value of the median of the four numbers.

[5 marks]

.....

.....

.....

.....

.....

.....

.....

.....

.....

.....

.....

Answer

END OF QUESTIONS

5



There are no questions printed on this page

**DO NOT WRITE ON THIS PAGE
ANSWER IN THE SPACES PROVIDED**



There are no questions printed on this page

**DO NOT WRITE ON THIS PAGE
ANSWER IN THE SPACES PROVIDED**

Copyright Information

For confidentiality purposes, from the November 2015 examination series, acknowledgements of third party copyright material will be published in a separate booklet rather than including them on the examination paper or support materials. This booklet is published after each examination series and is available for free download from www.aqa.org.uk after the live examination series.

Permission to reproduce all copyright material has been applied for. In some cases, efforts to contact copyright-holders may have been unsuccessful and AQA will be happy to rectify any omissions of acknowledgements. If you have any queries please contact the Copyright Team, AQA, Stag Hill House, Guildford, GU2 7XJ.

Copyright © 2015 AQA and its licensors. All rights reserved.

