

Please write clearly in block capitals.

Centre number

--	--	--	--	--

Candidate number

--	--	--	--

Surname

Forename(s)

Candidate signature

GCSE MATHEMATICS

H

Higher Tier Unit 2 Number and Algebra

Friday 6 November 2015

Morning

Time allowed: 1 hour 15 minutes

Materials

For this paper you must have:

- mathematical instruments.

You must **not** use a calculator.



Instructions

- Use black ink or black ball-point pen. Draw diagrams in pencil.
- Answer **all** questions.
- You must answer the questions in the spaces provided. Do not write outside the box around each page or on blank pages.
- Do all rough work in this book.

Information

- The marks for questions are shown in brackets.
- The maximum mark for this paper is 66.
- The quality of your written communication is specifically assessed in Questions 3 and 4. These questions are indicated with an asterisk (*).
- You may ask for more answer paper and graph paper. These must be tagged securely to this answer book.

Advice

- In all calculations, show clearly how you work out your answer.



Answer **all** questions in the spaces provided.

- 1 Ruth left her office at 1400
She drove to two meetings and then drove home.

The distance-time graph shows her journeys.



1 (a) How many minutes was she stopped altogether?

[1 mark]

.....
.....

Answer minutes

1 (b) How many miles did she drive altogether?

[1 mark]

.....
.....

Answer miles

1 (c) On which part of the journey was her speed the fastest?
Circle your answer.

[1 mark]

A C E F

Turn over for the next question



2 $N = 2a + b$

a is a two-digit square number.

b is a two-digit cube number.

What is the **smallest** possible value of N ?

[3 marks]

.....

.....

.....

.....

.....

.....

Answer



***3** Here are two offers for batteries.

OFFER A

Pack of 4

£2.52

$\frac{1}{3}$ off

OFFER B

Pack of 5

£2.75

Pay for 3 packs get 1 free

Zak wants to buy 40 batteries.

Which is the cheaper offer?
You **must** show your working.

[5 marks]

.....

.....

.....

.....

.....

.....

.....

.....

.....

.....

.....

.....

.....

.....

.....

.....

.....

.....

.....

.....

.....

.....

.....

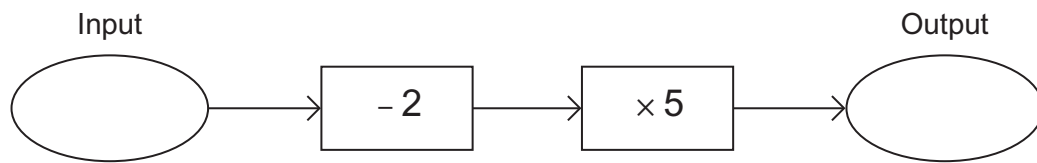
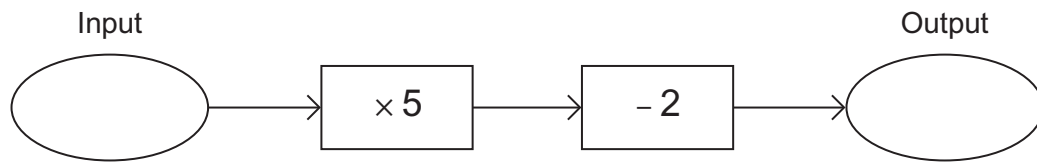
Answer

8

Turn over ►



*4 Here are two number machines.



When the inputs are equal,

show that the **difference** between the outputs is always 8

[3 marks]

.....

.....

.....

.....

.....

.....

.....

.....



5 (a) Solve $3(x - 2) = 21$

[3 marks]

.....
.....
.....
.....

$x =$

5 (b) Solve $8x - 7 > 6x + 12$

[3 marks]

.....
.....
.....
.....
.....

Answer

Turn over for the next question



6 (a) Write 132 as a product of prime factors.

[2 marks]

Answer

6 (b) Work out the Highest Common Factor (HCF) of 110 and 132

[2 marks]

Answer



7 Use approximations to estimate the value of $\frac{3.92^2}{0.48}$ [2 marks]

.....
.....
.....
.....

Answer

8 There are 40% more black balls than white balls in a bag.
Work out the ratio of black balls to white balls.
Give your answer in its simplest form. [2 marks]

.....
.....
.....
.....
.....
.....
.....
.....

Answer :

8

Turn over ►



9 (a) Here is a linear sequence.

21 23 25 27

Circle the expression for the n th term of the sequence.

[1 mark]

$23 - 2n$ $19n + 2$ $21 - 2n$ $2n + 19$

9 (b) A different sequence starts

a $2a - 3$

The term-to-term rule for this sequence is

multiply by 2 and subtract 3

The fourth term of this sequence is 35

Work out the value of a .

[3 marks]

.....
.....
.....
.....
.....
.....
.....
.....

Answer



10 Solve the simultaneous equations

$$2x - 3y = 24$$

$$6x + 2y = -5$$

Do **not** use trial and improvement.
You **must** show your working.

[3 marks]

.....

.....

.....

.....

.....

.....

.....

.....

.....

.....

.....

.....

Answer

Turn over for the next question



11 Work out $2\frac{3}{4} \times 1\frac{7}{9}$

Give your answer as a mixed number.

[3 marks]

.....

.....

.....

.....

.....

.....

Answer

12 The equations of five straight lines are shown below.
The line $y = 5x + 3$ is parallel to two of the lines.

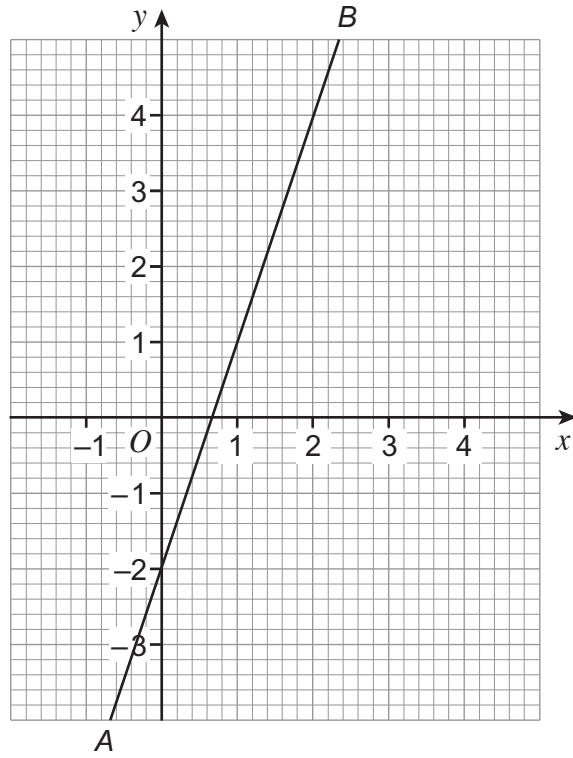
Circle the equations of these **two** lines.

[2 marks]

$3y = 15x - 3$ $3y = 5x - 3$ $3y = 5x + 3$ $y = 5x - 3$ $y = -5x + 3$



13



Work out the equation of line AB .

[3 marks]

.....

.....

.....

.....

.....

Answer



14 Put these in order starting with the smallest.

$$2\sqrt{3} \times \sqrt{2}$$

$$\sqrt{\frac{56}{2}}$$

$$\frac{10}{\sqrt{5}}$$

You **must** show your working.

[3 marks]

.....

.....

.....

.....

.....

.....

.....

.....

Smallest

.....

Largest



15 (a) Factorise $3x^2 - 13x - 10$

[2 marks]

.....
.....
.....
.....

Answer

15 (b) Simplify $\frac{3x^2 - 15x}{3x^2 - 13x - 10}$

[2 marks]

.....
.....
.....
.....
.....
.....
.....
.....

Answer



16 A microscope slide has 2^8 bacteria on it.
The number of bacteria doubles every hour.

After how many hours are there 8^4 bacteria on the slide?

[3 marks]

.....

.....

.....

.....

.....

.....

Answer hours

17 Rearrange the formula $y = \frac{3x + 5}{x}$

to make x the subject.

[3 marks]

.....

.....

.....

.....

.....

.....

.....

.....

Answer



18 (a) Write $x^2 - 10x + 12$ in the form $(x - a)^2 + b$
where a and b are integers.

[2 marks]

.....

.....

.....

.....

.....

.....

Answer

18 (b) When $(x - 2)^2 + 7$ has a minimum value, what is the value of x ?
Circle your answer.

[1 mark]

-2 2 7 11

Turn over for the next question



19 Work out the value of $125^{-\frac{2}{3}}$ **[3 marks]**

.....

.....

.....

.....

.....

.....

Answer

20 $(2x + 3y)^2 - (2x - 3y)^2 = 360$
Show that xy is a multiple of 5 **[4 marks]**

.....

.....

.....

.....

.....

.....

.....

.....

.....

.....

END OF QUESTIONS

7



There are no questions printed on this page

**DO NOT WRITE ON THIS PAGE
ANSWER IN THE SPACES PROVIDED**



There are no questions printed on this page

**DO NOT WRITE ON THIS PAGE
ANSWER IN THE SPACES PROVIDED**

Copyright information

For confidentiality purposes, from the November 2015 examination series, acknowledgements of third party copyright material will be published in a separate booklet rather than including them on the examination paper or support materials. This booklet is published after each examination series and is available for free download from www.aqa.org.uk after the live examination series.

Permission to reproduce all copyright material has been applied for. In some cases, efforts to contact copyright-holders may have been unsuccessful and AQA will be happy to rectify any omissions of acknowledgements. If you have any queries please contact the Copyright Team, AQA, Stag Hill House, Guildford, GU2 7XJ.

Copyright © 2015 AQA and its licensors. All rights reserved.

