

Centre Number						Candidate Number				
Surname						Other Names				
<b>Notice to Candidate.</b> The work you submit for assessment must be your own. If you copy from someone else or allow another candidate to copy from you, or if you cheat in any other way, you may be disqualified.										
<b>Candidate Declaration.</b> I have read and understood the Notice to Candidate and can confirm that I have produced the attached work without assistance other than that which is acceptable under the scheme of assessment.										
Candidate Signature						Date				

For Teacher's Use	
Section	Mark
PSA	
Stage 1	
Section A	
Section B	
<b>TOTAL</b> (max 50)	



General Certificate of Education  
Advanced Subsidiary Examination  
June 2013

# Physics (Specification A & B) PHY3T/P13/test

## Unit 3T AS Investigative Skills Assignment (ISA) P

For submission by 15 May 2013

<b>For this paper you must have:</b> <ul style="list-style-type: none"> <li>● your documentation from Stage 1</li> <li>● a ruler with millimetre measurement</li> <li>● a calculator.</li> </ul>	<b>Time allowed</b> <ul style="list-style-type: none"> <li>● 1 hour</li> </ul>
<b>Instructions:</b> <ul style="list-style-type: none"> <li>● Use black ink or black ball-point pen.</li> <li>● Fill in the boxes at the top of this page.</li> <li>● Answer <b>all</b> questions.</li> <li>● You must answer the questions in the space provided. Do not write outside the box around each page or on blank pages.</li> <li>● Do all rough work in this book. Cross through any work you do not want to be marked.</li> <li>● Show all your working.</li> </ul>	<b>Information</b> <ul style="list-style-type: none"> <li>● The marks for questions are shown in brackets.</li> <li>● The maximum mark for this paper and Stage 1 is 41.</li> </ul>
<b>Details of additional assistance (if any).</b> Did the candidate receive any help or information in the production of this work? If you answer yes give the details below or on a separate page. Yes <input type="checkbox"/> No <input type="checkbox"/>	

**Teacher Declaration:**

I confirm that the candidate's work was conducted under the conditions laid out by the specification. I have authenticated the candidate's work and am satisfied that to the best of my knowledge the work produced is solely that of the candidate.

Signature of teacher ..... Date .....

As part of AQA's commitment to assist students, AQA may make your coursework available on a strictly anonymous basis to teachers, examining staff and students in paper form or electronically, through the Internet or other means, for the purpose of indicating a typical mark or for other educational purposes. In the unlikely event that your coursework is made available for the purposes stated above, you may object to this at any time and we will remove the work on reasonable notice. If you have any concerns please contact AQA.

To see how AQA complies with the Data Protection Act 1988 please see our Privacy Statement at [aqa.org.uk](http://aqa.org.uk)

**Section A**

Answer **all** questions in the spaces provided.  
You should refer to your documentation from stage 1 as necessary.

- 1 (a)** Theory predicts that the equation for the straight line you drew in Stage 1 is

$$L = A \left( \frac{M}{\cos\left(\frac{\theta_m}{2}\right)} \right) + B$$

where  $A$  and  $B$  are positive constants.

- 1 (a) (i)** With reference to your graph, discuss whether your results support the theory.

.....

.....

.....

.....

.....

(2 marks)

- 1 (a) (ii)** With reference to your graph, comment on the reliability of your data.

.....

.....

(1 mark)

- 1 (a) (iii)** Use your graph to find a value for  $B$ .

.....

(2 marks)

- 1 (a) (iv)** Identify the physical quantity represented by  $B$ .

.....

.....

(1 mark)

1 (b) (i) Use data from the table to estimate the uncertainty in  $L$  for  $M = 100$  g.

.....  
.....  
(1 mark)

1 (b) (ii) Use data from the table to estimate the uncertainty in  $\theta_m$  for  $M = 100$  g.

.....  
.....  
(1 mark)

1 (b) (iii) For  $M = 100$  g, state which of the measured quantities in parts (b)(i) and (b)(ii) has the greater percentage uncertainty. Show your working.

.....  
.....  
.....  
.....  
(1 mark)

1 (b) (iv) Without further calculation, state and explain whether your answer to part (b)(iii) would be the same for  $M = 700$  g.

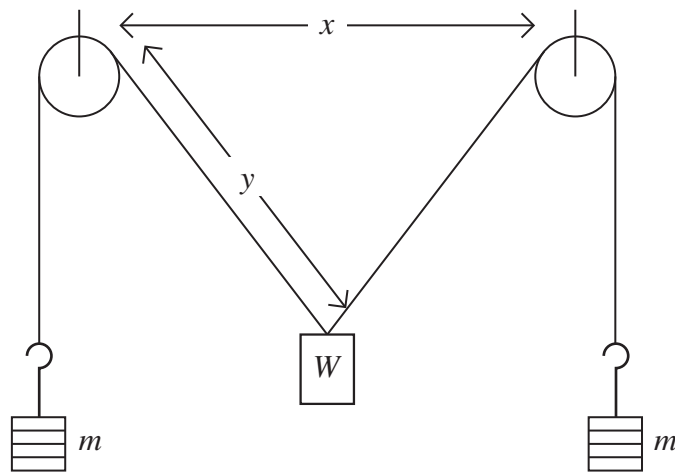
.....  
.....  
.....  
.....  
.....  
.....  
.....  
(3 marks)

## Section B

Answer **all** the questions in the spaces provided.

- 2 In an experiment similar to the one you performed in Stage 1 an unknown load, of weight,  $W$ , was supported by two strings kept in tension by equal masses,  $m$ , hung from their free ends, with each string passing over a frictionless pulley. The arrangement was symmetrical and is shown in **Figure 1**.

**Figure 1**



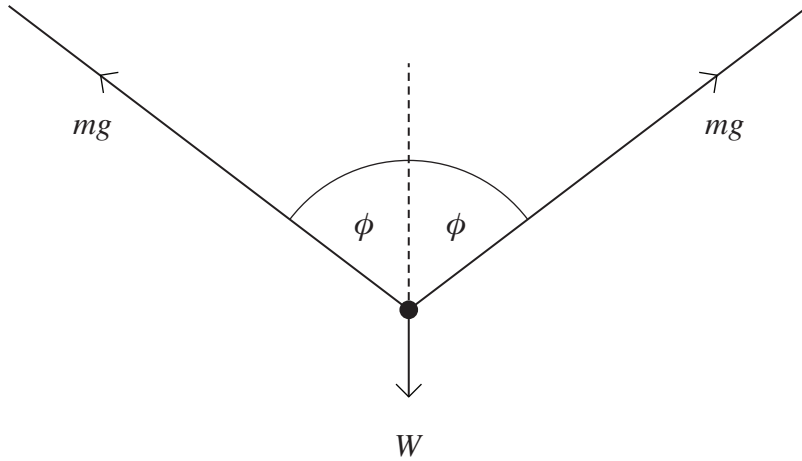
The distance  $x$  was kept constant throughout the experiment. The length  $y$  was measured for different values of  $m$ . The results are shown in the table.

The distance between the strings at the pulleys,  $x = 0.500$  m

$m / \text{kg}$	$y / \text{m}$	$(\frac{x}{y})^2$	$\frac{1}{\sqrt{4 - (\frac{x}{y})^2}}$
0.250	0.736	0.462	0.532
0.275	0.484	1.067	0.584
0.300	0.400	1.563	0.641
0.325	0.360	1.929	0.695
0.350	0.339	2.175	0.740
0.375	0.322		
0.400	0.308		

- 2 (a) **Figure 2** shows the three forces acting through the point at which the strings are attached to the load. The weight of the load is  $W$  and the tension in each string is  $mg$ , where  $g$  is gravitational field strength.

**Figure 2**



- 2 (a) (i) By resolving the forces vertically show that  $m = \frac{W}{2g\cos\phi}$

where  $\phi$  is the angle between each string and the vertical.

.....

.....

.....

.....

(1 mark)

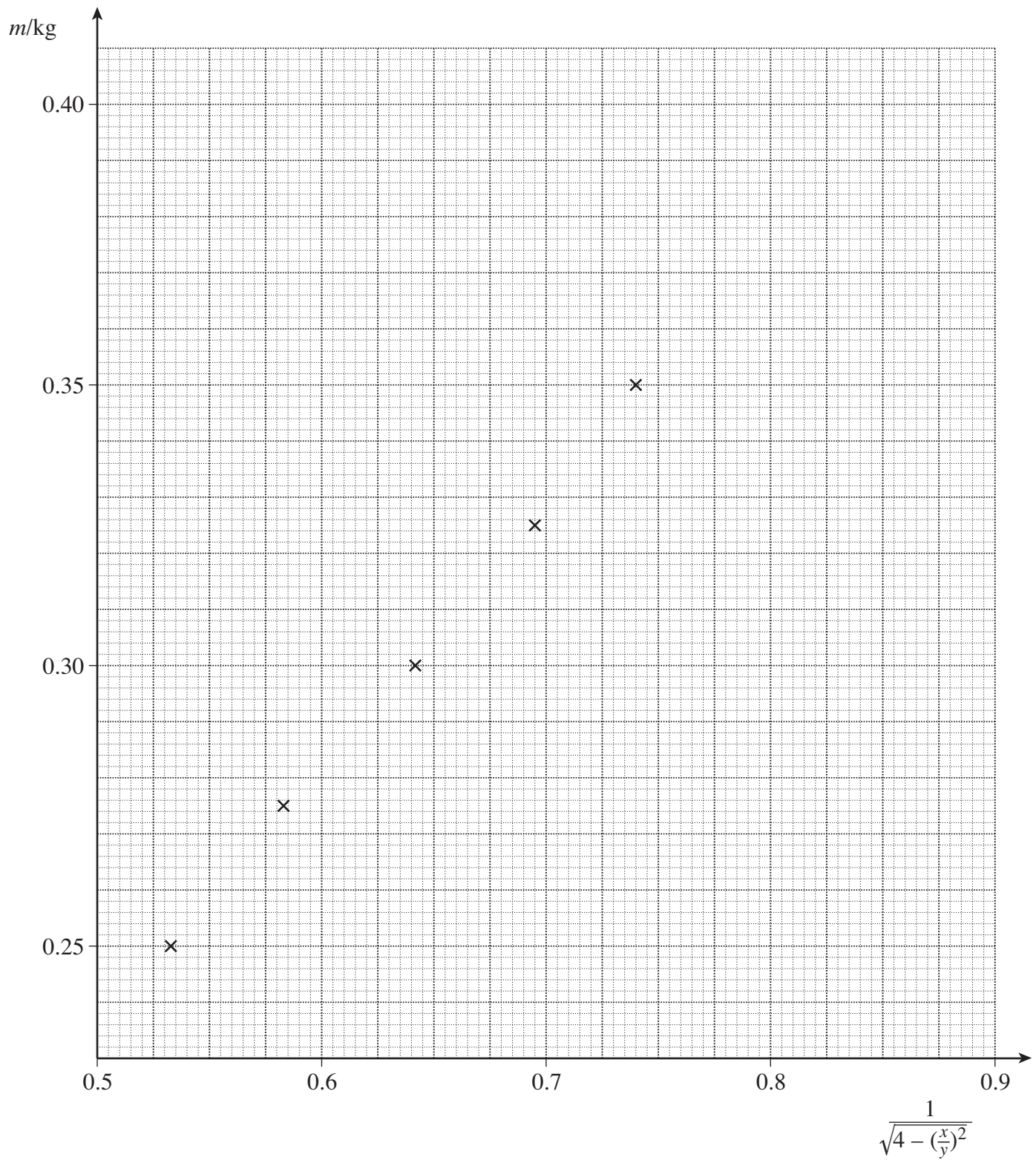
- 2 (a) (ii) Complete the table on page 4.

(2 marks)

- 2 (a) (iii) Complete the graph on the following page by plotting the missing two points and drawing a straight line of best fit.

(2 marks)

Turn over ►



**2 (b) (i)** Determine the gradient of your graph.

.....

.....

.....

.....

.....

.....

.....

(3 marks)

**2 (b) (ii)** The equation for the straight line is  $m = \frac{W}{g} \times \frac{1}{\sqrt{4 - (\frac{x}{y})^2}}$

Given that  $g = 9.81 \text{ N kg}^{-1}$ , determine a value for  $W$ .

.....

.....

.....

.....

(2 marks)

**2 (c)** The uncertainty in the measurement of  $x$  was  $\pm 1 \text{ mm}$  and the uncertainty in the measurement of  $y$  was  $\pm 2 \text{ mm}$ . Calculate the percentage uncertainty in  $(\frac{x}{y})^2$  for  $m = 0.300 \text{ kg}$ .

.....

.....

.....

.....

.....

.....

.....

.....

.....

.....

(3 marks)

Turn over ►

2 (d) (i) Explain the term *systematic error*.

.....  
.....  
.....  
.....

(1 mark)

2 (d) (ii) There may be a systematic error in this experiment because of friction in the pulleys. When the measurements were taken, increasing values of  $m$  were used. State and explain how friction in the pulleys would have affected the measured values of  $y$ .

.....  
.....  
.....  
.....  
.....

(2 marks)

16
----





.....

.....

.....

.....

.....

.....

(5 marks)

5
---

**END OF QUESTIONS**